
















2026/2027 O'QUV YILI UCHUN **SHAXMAT** IXTISOSLIGIDAN KASBIY (IJODIY) IMTIHONLARINING ME'YORIY TALABLARI VA BAHOLASH MEZONLARI
(Ixtisoslik bo'yicha maksimal ball - 93 ball)

Erkaklar va ayollar

Topshiriq №1	Sharti	Javoblar
	<p>Taxtdagi vaziyat qaysi debyutdan yuzaga keladi? Yurishlar ketma-ketligini notatsiya (yozuv)da ifodalang.</p>	
Topshiriq №2	Sharti	Javoblar
	<p>Ushbu debyut qanday nomlanadi. Yurishlar ketma-ketligini yozib ko'rsating.</p>	
Topshiriq №3	Sharti	Javoblar
	<p>Ushbu debyut qanday nomlanadi va yurishlar ketma-ketligini yozib ko'rsating.</p>	
Topshiriq №4	Sharti	Javoblar
	<p>Ushbu vaziyatda uchtadan yurishlar qilingan. Yurishlar ketma-ketligini yozib ko'rsating. Debyut qanday nomlanadi?</p>	

Topshiriq №5	Sharti	Javoblar
	<p>Ushbu vaziyatda ikkala tomon to'rttadan yurishlar qilishgan. Debyut qanday nomlanadi va yurishlar ketma-ketligini yozib ko'rsating.</p>	
Topshiriq №6	Sharti	Javoblar
	<p>Ushbu vaziyat qaysi debyutdan yuzaga kelgan? Yurishlar tartibini yozing.</p>	
Topshiriq №7	Sharti	Javoblar
	<p>Tomonlar uchtdan yurish qilgan. Debyut qanday nomlanadi? Yurishlar tartibini yozing.</p>	
Topshiriq №8	Sharti	Javoblar
	<p>Debyut qanday nomlanadi? Yurishlar tartibini yozing.</p>	

Topshiriq №9	Sharti	Javoblar
 <p>A chessboard diagram for problem 9. The board is labeled with files A-H and ranks 1-8. White pieces are at: King (e1), Queen (d1), Rook (a1), Bishop (c1), Knight (b1), Pawns (d2, e2, f2, g2, h2). Black pieces are at: King (h8), Queen (d4), Rook (a8), Knight (c4), Pawns (b4, c4, d4, e4, f4, g4, h4).</p>	<p>Yurish qoralardan. Kombinatsiyani toping.</p>	
Topshiriq №10	Sharti	Javoblar
 <p>A chessboard diagram for problem 10. White pieces: King (e1), Queen (c4), Rook (h1), Knight (e3), Pawns (a2, b2, c2, d2, e2, f2, g2, h2). Black pieces: King (g8), Queen (g8), Rook (h8), Knight (g8), Pawns (a8, b8, c8, d8, e8, f8, g8, h8).</p>	<p>Yurish oqlardan. Siz qanday o'ynar edingiz?</p>	
Topshiriq №11	Sharti	Javoblar
 <p>A chessboard diagram for problem 11. White pieces: King (e1), Queen (d1), Rook (a1), Knight (b1), Pawns (d2, e2, f2, g2, h2). Black pieces: King (e8), Queen (d8), Rook (a8), Knight (b8), Pawns (d8, e8, f8, g8, h8).</p>	<p>Yurish oqlardan. Siz qanday o'ynar edingiz?</p>	
Topshiriq №12	Sharti	Javoblar
 <p>A chessboard diagram for problem 12. White pieces: King (e1), Queen (d1), Rook (a1), Knight (b1), Pawns (d2, e2, f2, g2, h2). Black pieces: King (g8), Queen (g8), Rook (h8), Knight (g8), Pawns (a8, b8, c8, d8, e8, f8, g8, h8).</p>	<p>Yurish oqlardan. O'yin natijasi qanday bo'ladi? Siz qanday yo'l tanlaysiz?</p>	

Topshiriq №13	Sharti	Javoblar
	<p>Yurish oqlardan. Qanday yurishlar qilar edingiz? Dastlabki aniq yurishlarni ko'rsating.</p>	
Topshiriq №14	Sharti	Javoblar
	<p>Yurish oqlardan. Siz qanday o'ynar edingiz?</p>	
Topshiriq №15	Sharti	Javoblar
	<p>Yurish qoralardan. Siz qanday o'ynar edingiz?</p>	













Shaxmat ixtisosligi bo'yicha kasbiy-ijodiy imtihonlarining baholash mezonlari.
1-bo'lim savollari

1. Shaxmat ixtisosligi bo'yicha shaxmat nazariyasiga oid kasbiy-ijodiy imtihon sinovlari uchun jami 15 ta topshiriq berilgan. Har bir topshiriqning to'g'ri javoblari uchun 6,2 ball beriladi va maksimal ball miqdori 93 ballni tashkil etadi.

2. Topshiriqlarda nazariy, amaliy, taktika va strategiya, o'yin boshlari (debyut), o'yin o'rtalari (mittelshpil), kombinatsiyalar, hisoblash texnikasi, masala va etyud janrlariga oid turli g'oyalar mujassam etilgan.




3. Dastlabki 8 ta topshiriqda javoblarni belgilashda debyut nomi va yurishlarni notatsiyada (yozuvlarda) ifodalash zarur. Debyut nomini xato yozilganda - 3 ball, agar yurishlar tartibini yozishda texnik xatolarga yo'l qo'yilsa - 3 ball olib tashlanadi. Agar yurishlar umuman, yozuvda ifoda etilmasa, 3,2 ball olib qo'yiladi.

4. 9-15 topshiriqlarda mittelshpilga oid kombinatsiya va nazariy tushunchalar ifoda etilishi lozim, agar to'g'ri ifoda etilmasa ball berilmaydi. To'liq yechim (variantlari bilan) izoh va tushunchalar orqali ifoda etilmasa, umumiy balldan 3 ball olib tashlanadi.





Donalarning nomi	Donalarning qisqacha belgilanishi			Donalar tasviri	
	o'zbekcha	inglizcha	ruscha		
Shoh	Sh	K	Kp		
Farzin	Fz	Q	Ф		
Rux	R	R	Л		
Fil	F	B	С		
Ot	O	N	К		
Piyoda	--	--	--		





2026/2027 O'QUV YILI UCHUN **SHAXMAT** IXTISOSLIGIDAN KASBIY (IJODIY)
 IMTIHONLARINING ME'YORIY TALABLARI VA BAHOLASH MEZONLARI
 (Jismoniy tayyorgarlik bo'yicha maksimal ball - 63 ball)

Erkaklar va ayollar

Topshiriq №1	Sharti	Javoblar
	<p>Yurish qoralardan. Siz qanday o'ynar edingiz?</p>	
Topshiriq №2	Sharti	Javoblar
	<p>Yurish oqlardan. Siz qanday o'ynar edingiz?</p>	
Topshiriq №3	Sharti	Javoblar
	<p>Yurish qoralardan. Siz qanday o'ynar edingiz?</p>	
Topshiriq №4	Sharti	Javoblar

	<p>Yurish qoralardan. Kombinatsiyani toping.</p>	
<p>Topshiriq №5</p>	<p>Sharti</p>	<p>Javoblar</p>
	<p>Yurish qoralardan. Siz qanday o'ynar edingiz? Kombinatsiyani toping.</p>	
<p>Topshiriq №6</p>	<p>Sharti</p>	<p>Javoblar</p>
	<p>Yurish oqlardan. Durang qilish imkoniyatini nazariy jihatdan asoslab ko'rsating.</p>	
<p>Topshiriq №7</p>	<p>Sharti</p>	<p>Javoblar</p>
	<p>Yurish qoralardan. O'yin natijasi qanday bo'ladi? Siz qanday yo'l tanlaysiz?</p>	

Topshiriq №8	Sharti	Javoblar
 <p>A chessboard diagram for problem 8. The board is labeled with files A-H and ranks 1-8. White pieces are at: d3, e3, f3, g3, d4, e4, f4, g4, d5, e5, f5, g5. Black pieces are at: d6, e6, f6, g6, d7, e7, f7, g7. White kings are at d6 and e6. Black kings are at d7 and e7.</p>	<p>Yurish qoralardan. Siz qanday o‘ynar edingiz? O‘yin natijasini asoslab bering.</p>	
<p>Topshiriq №9</p>  <p>A chessboard diagram for problem 9. The board is labeled with files A-H and ranks 1-8. White pieces are at: a1, b1, c1, d1, e1, f1, g1, h1, d2, e2, f2, g2, d3, e3, f3, g3, d4, e4, f4, g4, d5, e5, f5, g5. Black pieces are at: a8, b8, c8, d8, e8, f8, g8, h8, d6, e6, f6, g6, d7, e7, f7, g7. White kings are at d6 and e6. Black kings are at d7 and e7.</p>	<p>Yurish qoralardan. Siz qanday o‘ynar edingiz?</p>	
<p>Topshiriq №10</p>  <p>A chessboard diagram for problem 10. The board is labeled with files A-H and ranks 1-8. White pieces are at: a1, b1, c1, d1, e1, f1, g1, h1, d2, e2, f2, g2, d3, e3, f3, g3, d4, e4, f4, g4, d5, e5, f5, g5. Black pieces are at: a8, b8, c8, d8, e8, f8, g8, h8, d6, e6, f6, g6, d7, e7, f7, g7. White kings are at d6 and e6. Black kings are at d7 and e7.</p>	<p>Yurish oqlardan. Siz qanday o‘ynar edingiz? O‘yin natijasini aniqlang.</p>	
<p>Topshiriq №11</p>  <p>A chessboard diagram for problem 11. The board is labeled with files A-H and ranks 1-8. White pieces are at: a1, b1, c1, d1, e1, f1, g1, h1, d2, e2, f2, g2, d3, e3, f3, g3, d4, e4, f4, g4, d5, e5, f5, g5. Black pieces are at: a8, b8, c8, d8, e8, f8, g8, h8, d6, e6, f6, g6, d7, e7, f7, g7. White kings are at d6 and e6. Black kings are at d7 and e7.</p>	<p>Masala. Oqlar boshlab ikki yurishda mot qiladi.</p>	

Topshiriq №12	Sharti	Javoblar
	<p>Masala. Oqlar boshlab ikki yurishda mot qiladi.</p>	
Topshiriq №13	Sharti	Javoblar
	<p>Masala. Oqlar boshlab to'rt yurishda mot qiladi.</p>	
Topshiriq №14	Sharti	Javoblar
	<p>Masala. Oqlar boshlab olti yurishda mot qiladi.</p>	
Topshiriq №15	Sharti	Javoblar
	<p>Yurish oqlardan. Himoya yo'lini toping.</p>	

Shaxmat ixtisosligi bo'yicha kasbiy-ijodiy imtihonlarining baholash mezonlari.
2-bo'lim savollari













1. Shaxmat ixtisosligi bo'yicha shaxmat taktikasiga oid kasbiy-ijodiy imtihon sinovlari uchun jami 15 ta topshiriq berilgan. Har bir topshiriqning to'g'ri javoblari uchun 4,2 ball beriladi va maksimal ball miqdori 63 ballni tashkil etadi.

2. Topshiriqlarda nazariy, amaliy, taktika va strategiya, o'yin, o'yin o'rtalari (mittelshpil), o'yin oxirlari (endshpil), kombinatsiyalar, hisoblash texnikasi, masala va etyud janrlariga oid turli g'oyalar mujassam etilgan.

3. 1-5 topshiriqlarda mittelshpilga oid kombinatsiya va nazariy tushunchalar ifoda etilishi lozim, agar to'g'ri ifoda etilmasa ball berilmaydi. To'liq yechim (variantlari bilan) izoh va tushunchalar orqali ifoda etilmasa, umumiy balldan 2 ball olib tashlanadi.

4. 6-10 topshiriqlarda o'yinning endshpil jarayonlarida uchraydigan mexanizm va kombinatsion g'oyalar ifodalangan. Xato javoblar uchun ball berilmaydi. Javob to'liq ifoda etilmasa, shuningdek, variantlarning biri to'liq ko'rsatilmasa, 2 ball olib tashlanadi.

5. 11-15 topshiriqlarda o'yin oxirlariga oid etyudlar, ikki, uch, to'rt va besh yurishli mot masalalari ifodalangan. Aniq va yagona yechim ko'rsatilmasa ball berilmaydi. Variant to'liq ifoda etilmasa, 2 ball olib tashlanadi.

Donalarning nomi	Donalarning qisqacha belgilanishi			Donalar tasviri	
	o'zbekcha	inglizcha	ruscha		
Shoh	Sh	K	Kp		
Farzin	Fz	Q	Ф		
Rux	R	R	Л		
Fil	F	B	С		
Ot	O	N	К		
Piyoda	--	--	--		

Kafedra mudiri

Imzo

A. Shapulatov

F.I.Sh